



A Day in the Life of a Footballer

Tell the Time


A footballer has a very busy day planned. Tell the time and help them to organise their schedule.



1. Their alarm was set for _____.
Write the time in words.




2. They prepared breakfast at _____.
Write the time in words.




3. At _____, they had a shower.
Write the time in words.




4. The team went for a run at _____.
Write the time in words.




5. Draw the hands on the clock to show when the team ate their lunch.



6. Draw the hands on the clock to show the time that the team went to the gym.



7. The clock shows the time that some of the team drove from the gym to the training ground. If the drive took 50 minutes, what time did they arrive at the training ground? Draw the hands on the clock.




8. The clock shows the time that the training started. It lasted for 1 hour 35 minutes. What time did training finish? Draw the hands on the clock.


A Day in the Life of a Footballer

Tell the Time


A footballer has a very busy day planned. Tell the time and help them to organise their schedule.




1. Draw the hands on the clock to show the time that the footballer got up.




2. Draw the hands on the clock to show the time that they ate their breakfast.




3. Draw the hands on the clock to show the time that they had a shower.




4. Draw the hands on the clock to show the time that the team went for a run.




5. Write the 24-hour time on the digital clock to show when they ate their lunch.



6. Write the 24-hour time on the digital clock to show when the team went to the gym.



7. The clock shows the time that the team drove from the gym to the training ground. If the drive took 35 minutes, what time did they arrive at the training ground? Write the time on the digital clock.




8. The clock shows the time that football training started. It lasted for 1 hour 15 minutes. What time did training finish? Write the time on the digital clock.


A Day in the Life of a Footballer

Tell the Time


A footballer has a very busy day planned. Tell the time and help them to organise their schedule.




1. Draw the hands on the clock to show the time that the footballer got up.



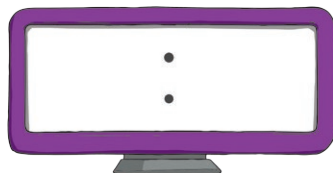

2. Draw the hands on the clock to show the time that they ate their breakfast.



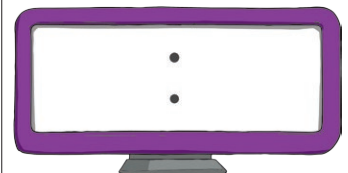

3. Draw the hands on the clock to show the time that they had a shower.



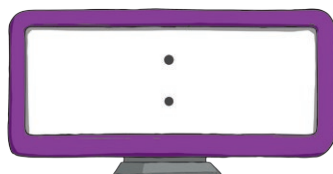
4. Draw the hands on the clock to show the time that the team went for a run.



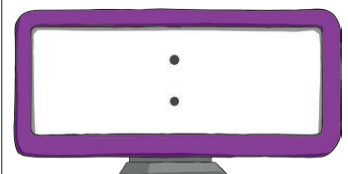
5. Write the 24-hour time on the digital clock to show when they ate their lunch.



6. Write the 24-hour time on the digital clock to show when the team went to the gym.



7. The clock shows the time that the team drove from the gym to the training ground. If the drive took 38 minutes, what time did they arrive at the training ground? Write the time on the digital clock.



8. The clock shows the time that football training started. It lasted for 1 hour 22 minutes. What time did training finish? Write the time on the digital clock.

A Day in the Life of a Footballer

Tell the Time Answers

1. Twenty (minutes) past six
2. Five (minutes) to seven
3. Half past eight
4. Ten (minutes) to ten
5. Analogue clock showing quarter to one
6. Analogue clock showing five past 3
7. Analogue clock showing five past five
8. Analogue clock showing five past seven



1. Analogue clock showing twenty-five to eight
2. Analogue clock showing ten to nine
3. Analogue clock showing twenty past nine
4. Analogue clock showing five past eleven
5. Digital clock showing 13:25
6. Digital clock showing 15:45
7. Digital clock showing 16:45
8. Digital clock showing 18:55



1. Analogue clock showing nineteen minutes past eight
2. Analogue clock showing twelve minutes to nine
3. Analogue clock showing twenty-nine minutes past ten
4. Analogue clock showing seven minutes past one
5. Digital clock showing 14:23
6. Digital clock showing 15:32
7. Digital clock showing 17:24
8. Digital clock showing 19:16

