

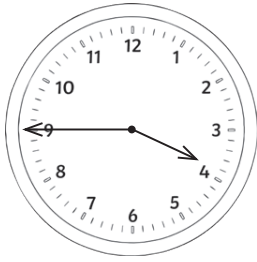





Time

1. Write the time these clocks show.



2. Draw the hands to show the given time on each clock.



1:15 or quarter past 1

4:50 or ten to 5

7:45 or quarter to 8

3. A film lasts for 165 minutes. How long is the film in minutes and hours?

4. Complete the sentences.

There are _____ seconds in 1 minute.

There are _____ minutes in 1 hour.

There are _____ hours in 1 day.

There are _____ days in 1 week.

There are _____ days in 1 year.

There are _____ months in 1 year.

5. How many days are in June? _____