

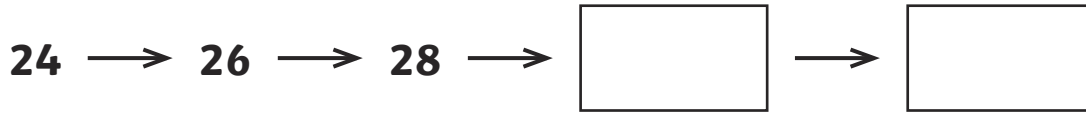
Name:

Date:

18
total marks

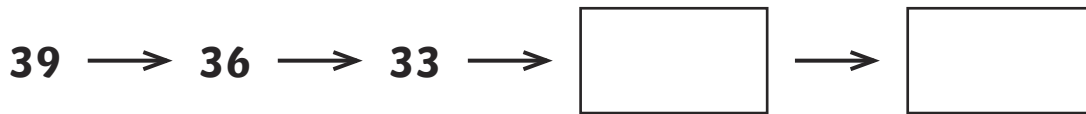
Procedural Practice Test - Year 3

1. Count on in twos.




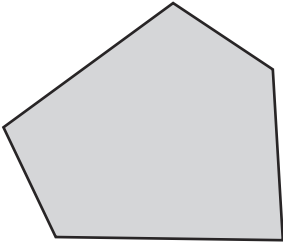

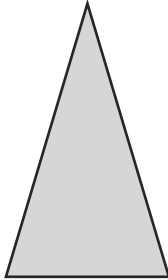
1 mark

Count back in threes.



1 mark

2. Cross (X) the shape that is in the wrong place.

	has 4 sides	does not have 4 sides
sides have equal length		
sides do not have equal length		

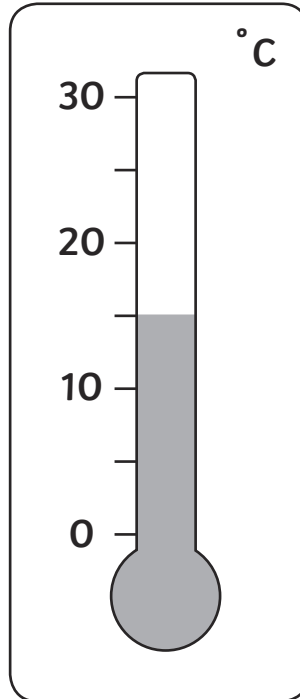
1 mark

total for this page

3. Double 13p =

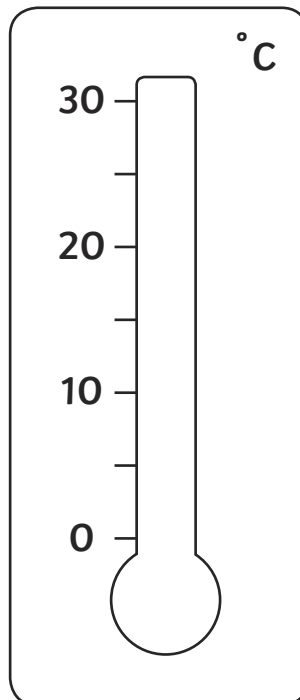
1 mark

4. Look at the thermometer.
What is the temperature?



1 mark

Show 26°C on this thermometer.



1 mark

total for this page


5. $27 + 36 =$

$53 - 41 =$

1 mark

1 mark

6. Join the clocks showing the same time.



08.13

10.45

03.45

12.19

1 mark

total for this page

7. Favourite fruit

Key: ● = 2 people

apple	● ● ● ● ●
pineapple	● ●
orange	
melon	● ● ● ● ●

8 choose orange.

Show this on the chart

How many choose apple?

1 mark

1 mark

8.

$4 \times 100 = 100 + 100 + 100 +$

1 mark

9. There are 6 pencils in each box.



How many in 5 boxes?

 pencils

1 mark

total for this page

10. There is £2 in each of these bags.



How many coins are in each bag?

Type of coins	Number of coins
1p coins	200
10p coins	
20p coins	

2 marks

11. Write in order.

62p

£3.10

138p

£2.10

smallest

largest

1 mark

total for this page

12. There are 6 eggs in each box.

Mr Williams needs 28 eggs.

How many boxes should he get?



boxes

2 marks


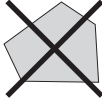




END OF TEST

total for
this page

1 24, 26, 28, 30, 32
39, 36, 33, 30, 27 2 marks

2

	has 4 sides	does not have 4 sides
sides have equal length		
sides do not have equal length		

1 mark





3 26p 1 mark

4 15°C 2 marks
Show line between 25°C and 30°C

5 63 2 marks
12

6 03:45 1 mark

7

apple	
pineapple	
orange	
melon	

9 people 2 marks

8 100 1 mark

9 30 pencils 1 mark

10 10p coins 20 2 marks
20p coins 10

11 62p, 138p, £2.10, £3.10 1 mark

12 5 boxes 2 marks