

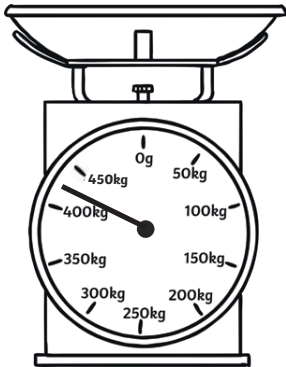
# Measurement

1. a) Measure this line using a ruler. Write its length in cm and in mm.

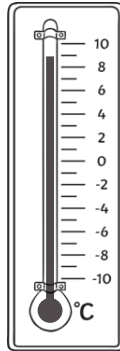
\_\_\_\_\_ = \_\_\_\_\_

b) Use a ruler to draw a line that measures 53mm.

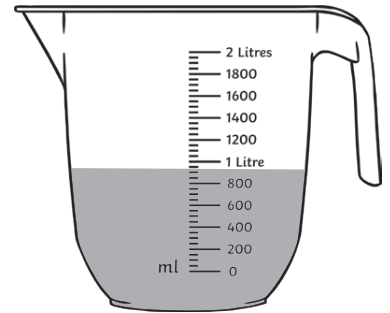
2. Write the amount shown on each scale.



\_\_\_\_\_ kg



\_\_\_\_\_ °C



\_\_\_\_\_ ml

3. Convert these units.

a) 1500g = \_\_\_\_\_ kg

d) 12.5cm = \_\_\_\_\_ mm

b) 2450g = \_\_\_\_\_ kg

e) 1.2km = \_\_\_\_\_ m

c) 1.75m = \_\_\_\_\_ cm

f) 2300ml = \_\_\_\_\_ l

4. Anna says five 750ml bottles will hold more than three 1l bottles. Is she right? Explain how you know.

\_\_\_\_\_  
\_\_\_\_\_  
\_\_\_\_\_